



## Year 6 Geography

### Compass Directions

#### Session 2

**Monday 1<sup>st</sup> March 2021**



**WALT: use the eight compass points to describe routes on a map**

#### **WILF:**





















Know the eight compass points.  
Follow directions using the eight compass points.  
Give directions using the eight compass points.

#### **Key Vocabulary**

**compass**  
**direction**  
**map**  
**points**  
**dial**

Task: Have a look through the short PowerPoint. This recaps the 8 compass points that we looked at last week. Today's activity is very similar. You need to use the map of the town and give directions to and from different places.

## Compass Directions

		bakery 			mosque 	
church 		park 		hospital 		
	taxi rank 		postbox 			cafe 
fire station 		toy shop 		airport 		
	school 		vet 		pool 	
theme park 		police station 				beach 
bus stop 		dentist 	Start 		supermarket 	

### Compass directions: the town

1. From the start, go north 4 squares and 3 squares east. Where are you now?
2. Go south-west 4 squares and west 2 squares. Where are you now?
3. Go north-east 1 square and east 1 square. Where are you now?
4. Go east 4 squares and north-west 1 square. Where are you now?
5. Go north-west 2 squares and north-east 2 squares. Where are you now?
6. Start at the vet. How do you get to the church?
7. Give directions from the park to the pool.
8. Write directions from somewhere on the map to another place.

This image shows a blank sheet of white paper with horizontal ruling lines. The lines are evenly spaced and run across the width of the page. There are no margins, text, or other markings on the paper.